

# Tropical Polynomials

Los Angeles Math Circle, May 15, 2016  
Bryant Mathews, Azusa Pacific University

## 1 Tropical Arithmetic

In tropical arithmetic, we define new addition and multiplication operations on the real numbers. The **tropical sum** of two numbers is their minimum:

$$x \oplus y = \min(x, y)$$

while the **tropical product** of two numbers is their sum:

$$x \odot y = x + y.$$

1. Which of the following properties hold in tropical arithmetic?

- **Addition is commutative:**  $x \oplus y = y \oplus x$ .
- **Addition is associative:**  $(x \oplus y) \oplus z = x \oplus (y \oplus z)$ .
- **An additive identity exists:** There exists a real number  $n$  such that  $x \oplus n = x$  for all real numbers  $x$ .

2. Let's expand our number set to include a tropical additive identity. What would be an appropriate name for this new "number"? Give appropriate definitions for the tropical sum and tropical product of this new number with a general real number  $x$  and with itself.

3. Which of the following properties hold in tropical arithmetic?

- **Additive inverses exist:** For each number  $x$ , there exists a number  $y$  such that  $x \oplus y = n$ , where  $n$  is the additive identity.
  
- **Multiplication is associative:**  $(x \odot y) \odot z = x \odot (y \odot z)$ .
  
- **Multiplication is commutative:**  $x \odot y = y \odot x$ .
  
- **There exists a multiplicative identity:** There exists a number  $i$  such that  $x \odot i = x$  for all numbers  $x$ .
  
- **Multiplicative inverses exist:** For each number  $x$  not equal to the additive identity, there exists a number  $y$  such that  $x \odot y = i$ , where  $i$  is the multiplicative identity.
  
- **Multiplication distributes over addition:**  $x \odot (y \oplus z) = x \odot y \oplus x \odot z$ .

4. Complete the tropical addition and multiplication tables below.

$\oplus$	1	2	3	4	$\infty$
1					
2					
3					
4					
$\infty$					

$\odot$	0	1	2	3	4
0					
1					
2					
3					
4					

5. Expand and simplify  $f(x) = (x \oplus 2)(x \oplus 3)$ , where juxtaposition represents tropical multiplication. Then use your expansion to compute  $f(1)$  and  $f(4)$ .

## 2 Tropical Polynomials

A **polynomial** is an expression formed by adding and/or multiplying together numbers and copies of a variable  $x$ . Every polynomial can be written in the form

$$a_n x^n + \cdots + a_2 x^2 + a_1 x + a_0$$

for some nonnegative integer  $n$  and **coefficients**  $a_n, \dots, a_2, a_1, a_0$ .

It follows from the **Fundamental Theorem of Algebra** that any non-constant polynomial with real coefficients can be written as a product of polynomials of degree 1 or 2 with **real coefficients**. For example,

$$x^5 + 8x^4 + 17x^3 - 2x^2 - 64x - 160 = (x^2 + 2x + 5)(x - 2)(x + 4)^2.$$

Over the complex numbers, any such polynomial can be factored completely into polynomials of degree 1 with **complex coefficients**. For the example above,

$$x^5 + 8x^4 + 17x^3 - 2x^2 - 64x - 160 = (x + 1 - 2i)(x + 1 + 2i)(x - 2)(x + 4)^2.$$

The factors can be determined by computing the **roots** (or the “zeros”) of the polynomial. The polynomial above has roots

$$-1 + 2i, -1 - 2i, 2, -4, -4.$$

We say that the root  $-4$  has **multiplicity 2**.

There is a quadratic formula for determining the roots of a polynomial of degree 2, along with cubic and quartic formulas for degrees 3 and 4. However, starting with degree 5, there is no longer a nice formula which enables us to find the roots of every polynomial. For polynomials of large degree, we generally must settle for approximate roots, found by a computer.

A **tropical polynomial** is an expression formed by (tropically) adding and/or multiplying tropical numbers (i.e., real numbers or  $\infty$ ) and copies of a variable  $x$ . Every tropical polynomial can be written in the form

$$(a_n \odot x^n) \oplus \cdots \oplus (a_2 \odot x^2) \oplus (a_1 \odot x) \oplus (a_0)$$

for some nonnegative integer  $n$  and **coefficients**  $a_n, \dots, a_2, a_1, a_0$ . (Note that the exponents here represent repeated *tropical* multiplication.) For convenience, we represent tropical multiplication by juxtaposition, in the usual manner:

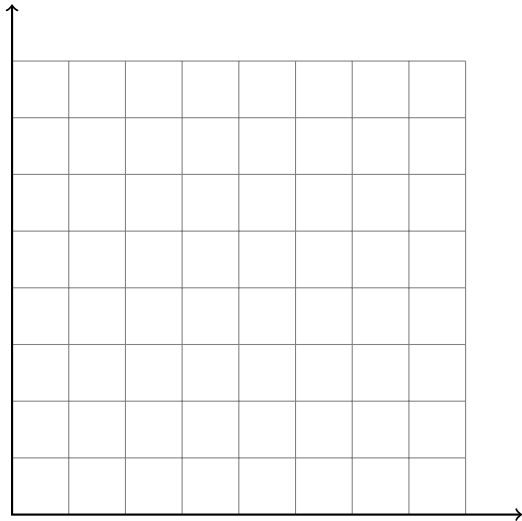
$$a_n x^n \oplus \cdots \oplus a_2 x^2 \oplus a_1 x \oplus a_0.$$

### Questions:

- *Can tropical polynomials always be factored completely into polynomials of degree 1?*
- *Is there a tropical quadratic formula for finding the roots of quadratic polynomials? How about a cubic formula?*
- *For polynomials of large degree, must we rely on a computer to find roots, or can we do it by hand?*

## 2.1 Tropical quadratic polynomials

6. Draw a precise graph of the tropical polynomial  $f(x) = x^2 \oplus 1x \oplus 4$ . You may find it helpful to first rewrite the tropical polynomial (as an expression involving standard operations) using the definitions of  $\oplus$  and  $\ominus$ .



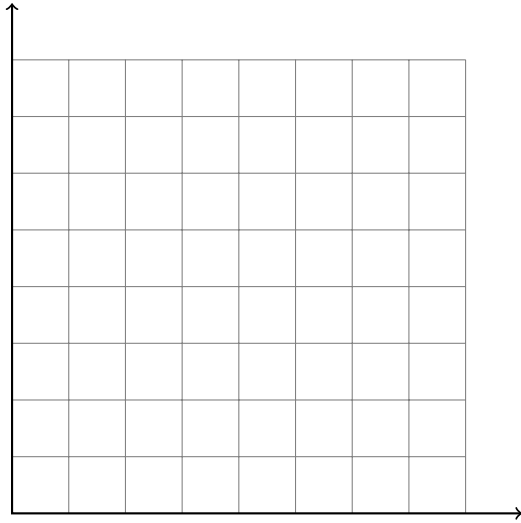
Now, try to factor the tropical polynomial  $x^2 \oplus 1x \oplus 4$  into linear (degree 1) factors. In other words, find numbers  $r$  and  $s$  such that

$$x^2 \oplus 1x \oplus 4 = (x \oplus r)(x \oplus s).$$

These numbers  $r$  and  $s$  are called the **roots** of the tropical polynomial. (Note that we use  $x \oplus r$  and  $x \oplus s$  because we do not have a tropical subtraction.)

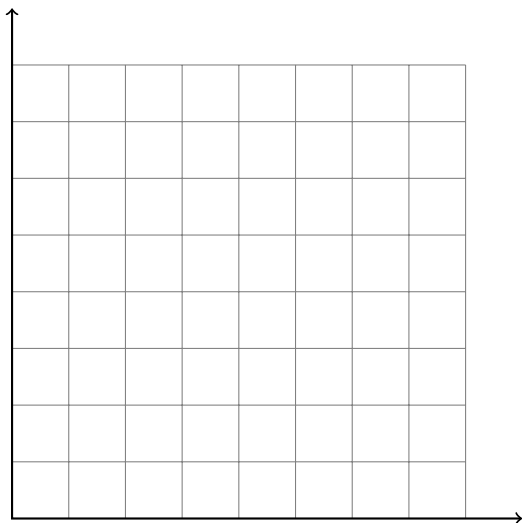
Do you notice any relationship between the graph and the factorization? Can you see the roots in the graph?

7. Graph  $f(x) = -2x^2 \oplus x \oplus 8$ , and then find a factorization of  $f(x)$  in the form  $a(x \oplus r)(x \oplus s)$ . Can you see the roots  $r$  and  $s$  in the graph? How are the roots related to the coefficients of  $f(x)$ ?

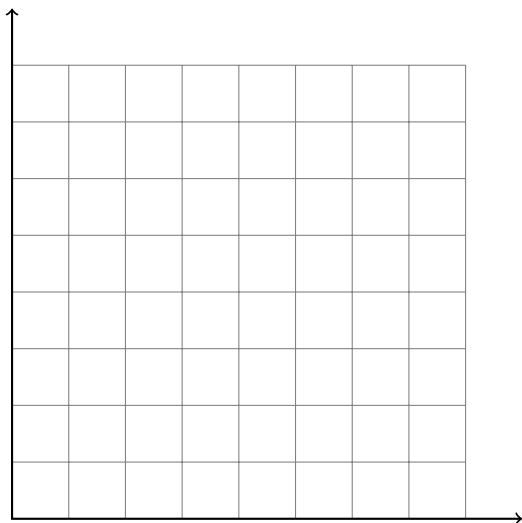


8. Find a tropical polynomial  $f(x)$  with a value of 7 for all sufficiently large  $x$  and with roots 4 and 5.

9. Graph  $f(x) = 1x^2 \oplus 3x \oplus 5$ , and then find a factorization in the form  $f(x) = a(x \oplus r)(x \oplus s)$ . How is this graph different from the previous ones? How is this factorization different from the others? How are the roots related to the coefficients of  $f(x)$ ?



10. Graph  $f(x) = 2x^2 \oplus 4x \oplus 4$ . Find a factorization in the form  $f(x) = a(x \oplus r)(x \oplus s)$ , or show that one does not exist.



11. Can you find a tropical polynomial which has the same graph as  $f(x) = 2x^2 \oplus 4x \oplus 4$ , but which can be factored?

*The **Tropical Fundamental Theorem of Algebra** says that, for every tropical polynomial  $f(x)$ , there is a unique tropical polynomial  $\bar{f}(x)$  with the same graph (and therefore determining the same function) which can be factored into linear factors. We sometimes say “the roots of  $f(x)$ ” when we really mean “the roots of  $\bar{f}(x)$ .”*

12. If  $f(x) = ax^2 \oplus bx \oplus c$ , then  $\bar{f}(x) = ax^2 \oplus Bx \oplus c$  for some  $B$ . Find a formula for  $B$  in terms of  $a$ ,  $b$ , and  $c$ . There are two different cases to consider.

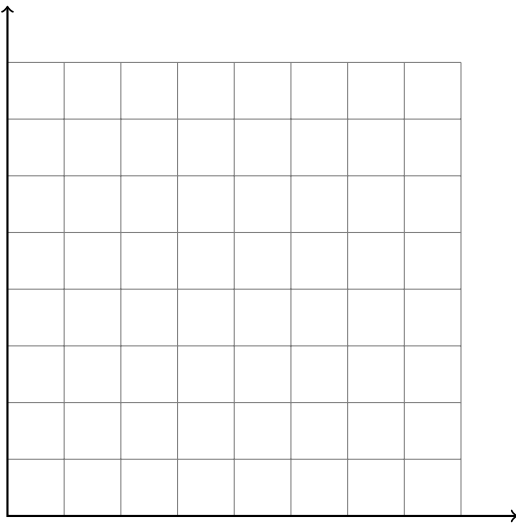
13. State a tropical quadratic formula in terms of  $a, b, c$  for the roots  $x$  of a tropical polynomial  $f(x) = ax^2 \oplus bx \oplus c$  (that is, the roots of the corresponding  $\bar{f}$ ). There are once again two separate cases.

## 2.2 Tropical cubic polynomials

14. For each cubic polynomial below,

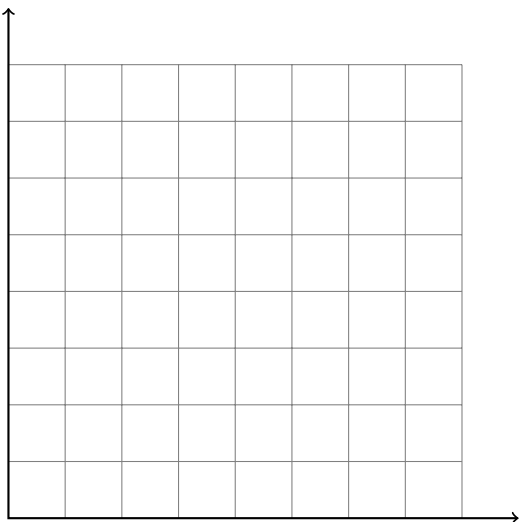
- sketch the graph of the polynomial,
- use the graph to find the roots of the polynomial, and
- write (and expand) a product of linear factors with the same graph as the given polynomial.

a)  $f(x) = x^3 \oplus 1x^2 \oplus 3x \oplus 6$

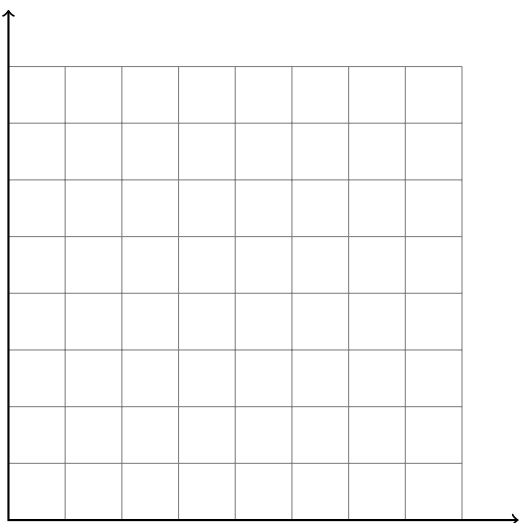




b)  $g(x) = x^3 \oplus 1x^2 \oplus 6x \oplus 6$



c)  $h(x) = x^3 \oplus 6x^2 \oplus 6x \oplus 6$



15. If  $f(x) = ax^3 \oplus bx^2 \oplus cx \oplus d$ , then  $\bar{f}(x) = ax^3 \oplus Bx^2 \oplus Cx \oplus d$  for some  $B$  and  $C$ . With the preceding examples as a guide, find formulas for  $B$  and  $C$  in terms of  $a$ ,  $b$ ,  $c$ , and  $d$ .

### 2.3 General tropical polynomials

16. Can you guess the roots of the following polynomial?

$$f(x) = 3x^6 \oplus 4x^5 \oplus 2x^4 \oplus x^3 \oplus 1x^2 \oplus 4x \oplus 5$$

17. If

$$f(x) = a_n x^n \oplus a_{n-1} x^{n-1} \oplus \cdots \oplus a_2 x^2 \oplus a_1 x \oplus a_0,$$

then

$$\bar{f}(x) = a_n x^n \oplus A_{n-1} x^{n-1} \oplus \cdots \oplus A_2 x^2 \oplus A_1 x \oplus a_0.$$

Can you find a formula for each  $A_j$  in terms of the  $a_i$ ? How about formulas for the roots  $r_1, r_2, \dots, r_n$ ? Can you find a geometric interpretation of these formulas in terms of the points  $(-i, a_i)$ , for  $0 \leq i \leq n$ ?