

## Vectors and Physics 2

Oleg Gleizer

prof1140g@math.ucla.edu

## Warm-up

**Problem 1** *Simplify the following fraction.*

$$\frac{\frac{a}{b} - \frac{c}{d}}{\frac{a}{d} + \frac{c}{b}} =$$

**Problem 2** *Make the number 120 using nothing else but five zeroes and some symbols of math operations.*

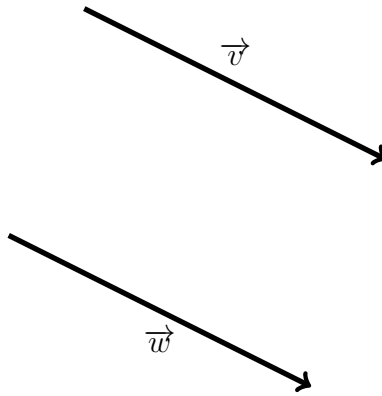
**Problem 3** *In a dark room, there is a deck of 52 cards on the table. Ten of the cards face up, the rest of the deck face down. The facing up cards are randomly spread throughout the deck. Is it possible to split the deck into two parts, possibly having different size, so that the number of the cards facing up is the same for each of the parts, all without turning on the light?*

**Problem 4** *There lived 2014 people on an island. Some of them were knights and the others were liars. The knights always tell the truth while the liars always lie. Every day, one of the inhabitants said, “After my departure, the number of knights on the island will be equal to the number of liars,” and then left the island. After 2014 days there was nobody left on the island. How many liars were there initially?*

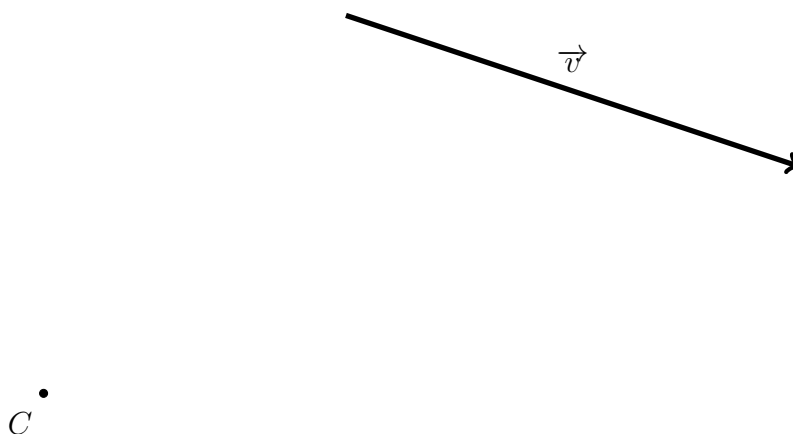
**Problem 5** *The program “ChangeSum” is given a list of three numbers, 20, 1, and 4. The program creates a new list by replacing each given number by the sum of the other two. This way, the program replaces 20 by 5, 1 by 24, and 4 by 21. The program runs 2013 times using the output of the previous cycle as the input of the next one and stores all the 2014 triples of numbers in the memory. What is the maximal difference between two elements in a triple among all the triples?*

## Back to vectors

**Problem 6** *Is it possible to check whether  $\vec{v} = \vec{w}$  on the picture below using only a compass? Why or why not?*

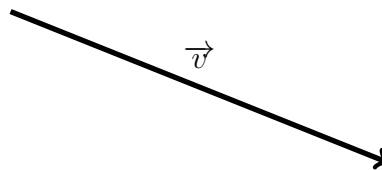


**Problem 7** Use a compass and a ruler to construct the vector  $\vec{w} = -.75\vec{v}$  for the vector  $\vec{v}$  given below such that point  $C$  is its terminal point.



**Note 1** We know how to divide a segment into any positive integral number of parts. We also know how to construct a vector opposite to a given one. Combining these two procedures together, we can multiply a vector by any rational number, using a compass and ruler as tools. Multiplying a vector by a number that is not rational is a bit more tricky, but still quite doable.

**Problem 8** Use a compass and a ruler to construct the vector  $\vec{w} = \sqrt{3}\vec{v}$  for the vector  $\vec{v}$  given below such that point  $C$  is its initial point. Hint: the Pythagoras' Theorem will help.

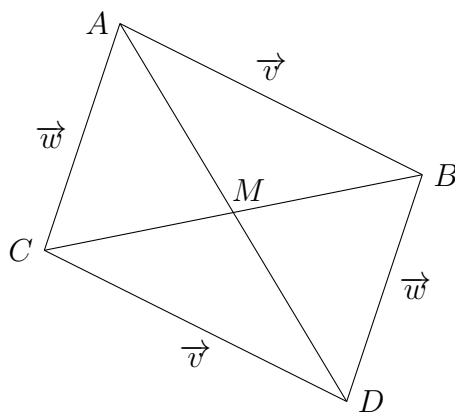


$C$  •

Vectors are a very powerful tool. Below we will use vector algebra to re-prove some of the statements we have proven in the past.

**Example 1** *Prove that diagonals of a parallelogram in the Euclidean plane split each other in halves.*

Consider the below parallelogram  $ABCD$ . Let  $\overrightarrow{AB} = \vec{v}$  and  $\overrightarrow{AC} = \vec{w}$ . Let  $M$  be the midpoint of the diagonal  $AD$ . To prove the statement, we need to show that the diagonal  $CB$  also passes through  $M$  and that  $|CM| = |MB|$ .



According to the definition of vector addition (a.k.a. the parallelogram rule),  $\overrightarrow{AD} = \vec{v} + \vec{w}$ . Hence,  $\overrightarrow{AM} = .5(\vec{v} + \vec{w})$ .

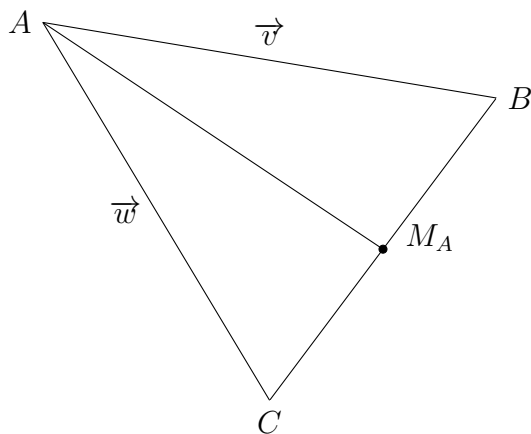
According to the definitions of an opposite vector and of vector addition,  $\overrightarrow{CB} = \vec{v} - \vec{w}$ . Hence, the vector that originates at  $C$  and terminates at the midpoint of the diagonal  $CB$  is  $.5(\vec{v} - \vec{w})$ . Let us add up  $\vec{w}$  and this vector.

$$\vec{w} + .5(\vec{v} - \vec{w}) = .5(\vec{v} + \vec{w}) = \overrightarrow{AM}$$

In other words, if we first walk along the vector  $\overrightarrow{AC}$  and then continue along the vector that originates at  $C$  and terminates at the midpoint of the diagonal  $CB$ , we end up at  $M$ , the midpoint of the diagonal  $AD$ . Therefore, the midpoints of the diagonals coincide. *Q.E.D.*

In the following sequence of problems, we will use vector algebra to prove that all the three medians of a triangle intersect at one point that splits each median in the ratio 2 : 1 counting from the vertex.

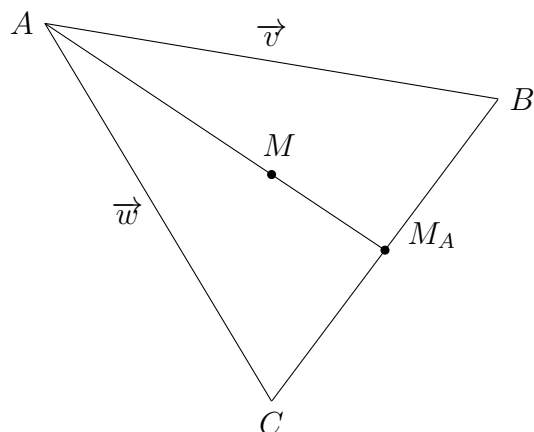
**Problem 9** Consider the triangle  $ABC$  below. Let  $\overrightarrow{AB} = \vec{v}$  and  $\overrightarrow{AC} = \vec{w}$ . Let  $M_A$  be the midpoint of the side  $BC$ .



Use the parallelogram rule to find the numbers  $a$  and  $b$  such that  $\overrightarrow{AM_A} = a\vec{v} + b\vec{w}$ . In other words, express  $\overrightarrow{AM_A}$  as a linear combination of  $\vec{v}$  and  $\vec{w}$ .



**Problem 10** Let  $M$  be a point of the median  $AM_A$  such that  $|AM| = 2|MM_A|$ .

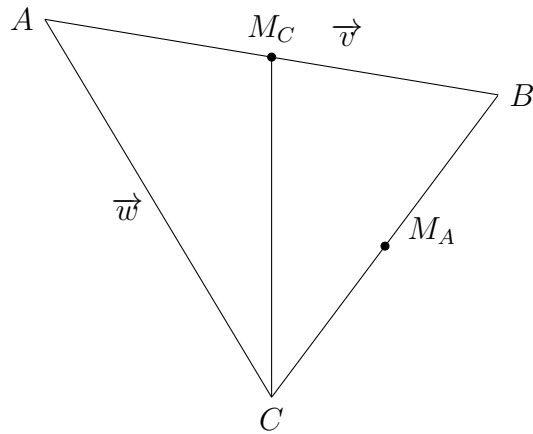


Express  $\overrightarrow{AM}$  as a linear combination of  $\vec{v}$  and  $\vec{w}$ . Simplify the coefficients of the expression, the numbers  $a$  and  $b$  such that  $\overrightarrow{AM} = a\vec{v} + b\vec{w}$ , as much as possible.

Let  $M_C$  (on the picture below) be the midpoint of the side  $AB$ . We need to show that

1. the line  $CM_C$  passes through  $M$ ; and
2.  $|CM| = 2|MM_C|$ .

**Problem 11** Express  $\overrightarrow{CM_C}$  as a linear combination of  $\vec{v}$  and  $\vec{w}$ .



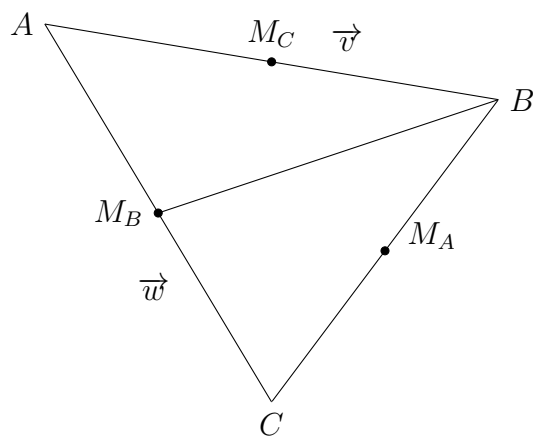
**Problem 12** Represent the vector

$$\vec{w} + \frac{2}{3}\overrightarrow{CM_C}$$

as a linear combination of  $\vec{v}$  and  $\vec{w}$ . Compare the result to  $\overrightarrow{AM}$ .

Let  $M_B$  be the midpoint of the side  $AC$ .

**Problem 13** Express  $\overrightarrow{BM_B}$  as a linear combination of  $\vec{v}$  and  $\vec{w}$ .



**Problem 14** Represent the vector

$$\vec{v} + \frac{2}{3}\overrightarrow{BM_B}$$

as a linear combination of  $\vec{v}$  and  $\vec{w}$ . Compare the result to  $\overrightarrow{AM}$ .

We have proven the median theorem. However, a double-check never hurts.

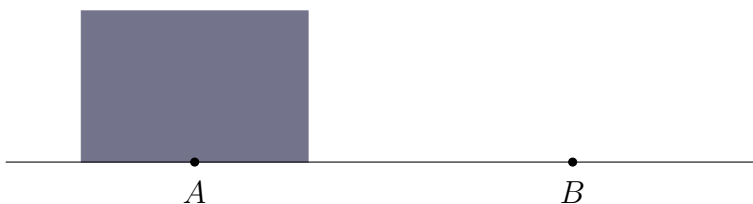
**Problem 15** *Represent the vector*

$$\frac{1}{2}\vec{w} + \frac{1}{3}\overrightarrow{M_B B}$$

*as a linear combination of  $\vec{v}$  and  $\vec{w}$ . Compare the result to  $\overrightarrow{AM}$ .*

As the following problem shows, vectors are a great tool not only in mathematics, but also in physics.

**Problem 16** *You need to slide a heavy box over the floor from point A to point B. The box is about twice as short as you are. Which way is easier, to push or to pull? Why?*



**Problem 17** *The dot on the picture below represents a spaceship. (Compared to the vastness of space, spaceships do look like dots.) There are three forces acting on the ship.  $\vec{T}$  is the thrust of the ship's engine.  $\vec{P}$  is the gravitational pull of the neighbouring planet.  $\vec{S}$  is the gravitational pull of the planet's home star. You are the captain. Use a compass and a ruler to figure out where the resulting force would steer the ship.*

